

Name: \_\_\_\_\_

Date: \_\_\_\_\_

Per.: \_\_\_\_\_

Assign.# \_\_\_\_\_

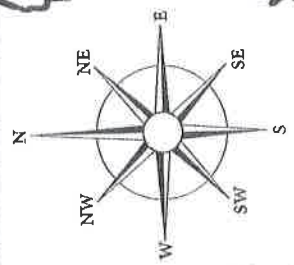
WEEK 1

# Elements on a Map

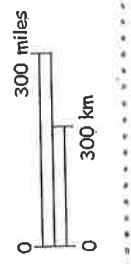
**Title**

## The Contiguous United States

**Compass Rose**



**Scale**



1 inch: 300 miles

**Legend**

- state border
- international border
- ★ state capital
- ⊙ national capital

**Inset Map**



Name \_\_\_\_\_



# Elements on a Map

Wednesday

1. Name the five elements that are shown on the map.

---

---

2. What does the title tell you about the map?

---

Thursday

1. How many states are part of the contiguous United States? Which states are not contiguous?

---

2. Name the cardinal and intermediate directions shown on the compass rose.

---

Friday

1. What is another name for a legend? What kinds of things are shown on the legend?

---

---

2. Name the two countries that border the United States. Which elements help to identify them?

---



# Elements on a Map

Wednesday

1. Why is the inset map of North America included?

---

---

2. Use the scale and a ruler to find the approximate distance from Denver to Lincoln. Measure to the nearest  $\frac{1}{4}$  inch.

---

Thursday

1. Use the scale and a ruler to find the approximate distance from Raleigh to Little Rock and then to Austin. Measure to the nearest  $\frac{1}{4}$  inch.

---

2. Use the scale and a ruler to find the approximate distance from the nation's capital to the capital of California. Measure to the nearest  $\frac{1}{4}$  inch.

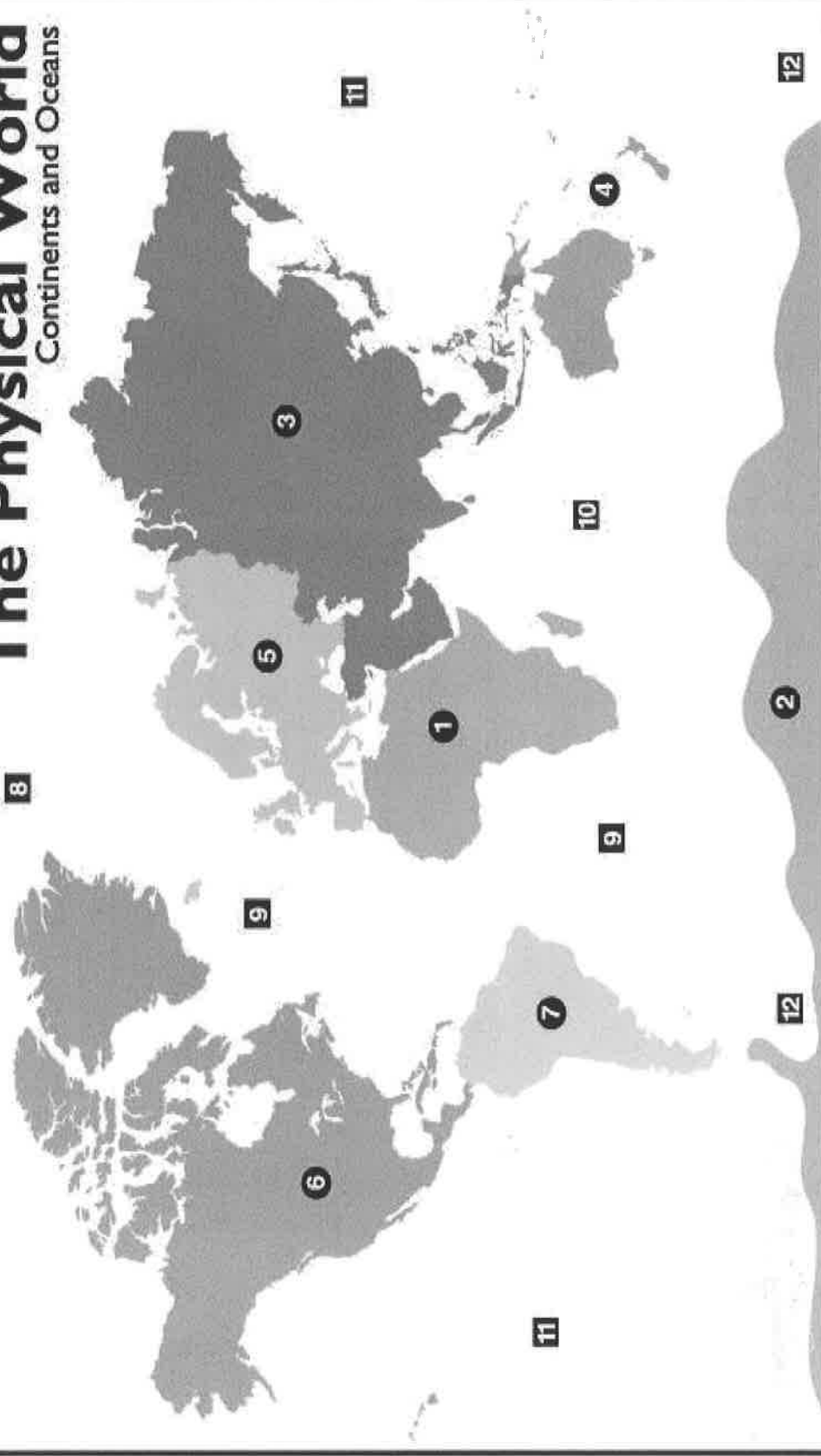
---

Friday

Write two questions about the distance between capitals on the back of the map. Be sure to include the answers. Ask a classmate to solve the two problems.

# The Physical World

## Continents and Oceans



**Name the Continents**

1 \_\_\_\_\_ 4 \_\_\_\_\_ 6 \_\_\_\_\_

2 \_\_\_\_\_ 5 \_\_\_\_\_ 7 \_\_\_\_\_

3 \_\_\_\_\_

**Name the Oceans**

8 \_\_\_\_\_ 11 \_\_\_\_\_

9 \_\_\_\_\_ 12 \_\_\_\_\_

10 \_\_\_\_\_

- \*Draw: The equator line and prime meridian line and label them
- \*Label: The 4 hemispheres: Northern, Southern, Eastern, and Western
- \*Draw a compass rose in the bottom left hand corner and label it
- \*Label these places in the continents they belong in: Mesopotamia, Egypt, India, China, Greece, Rome