

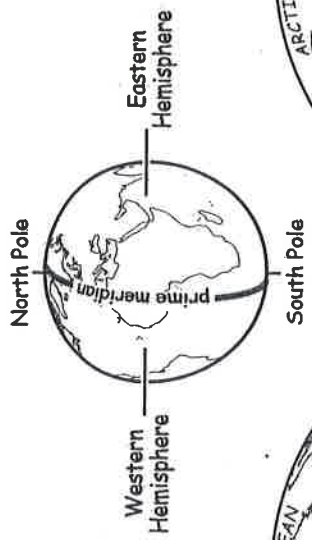
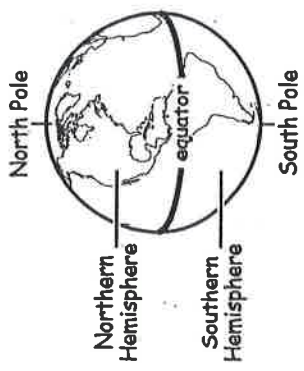
Name: \_\_\_\_\_

Date: \_\_\_\_\_

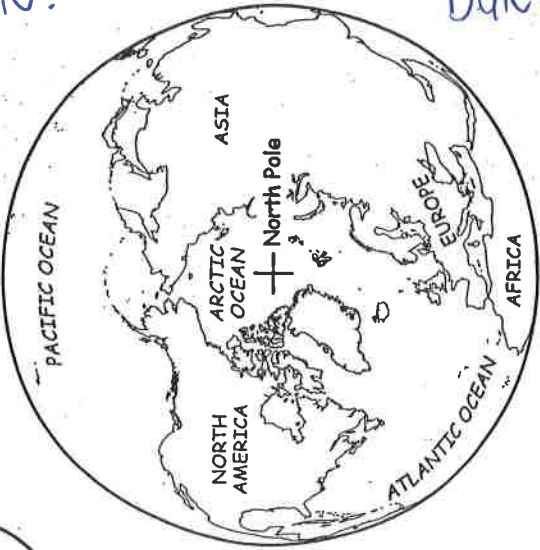
Per: \_\_\_\_\_

Assign# \_\_\_\_\_

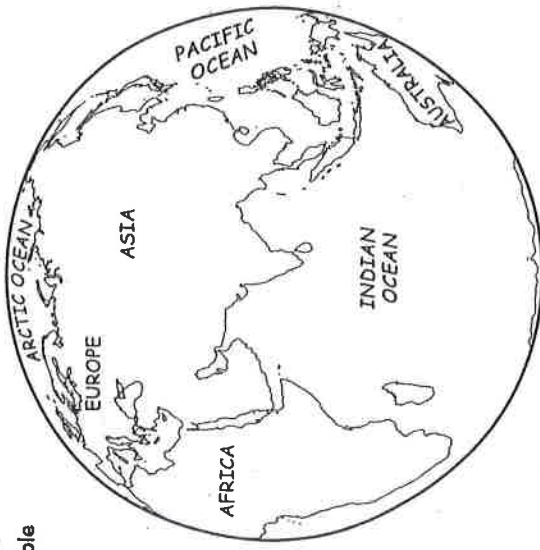
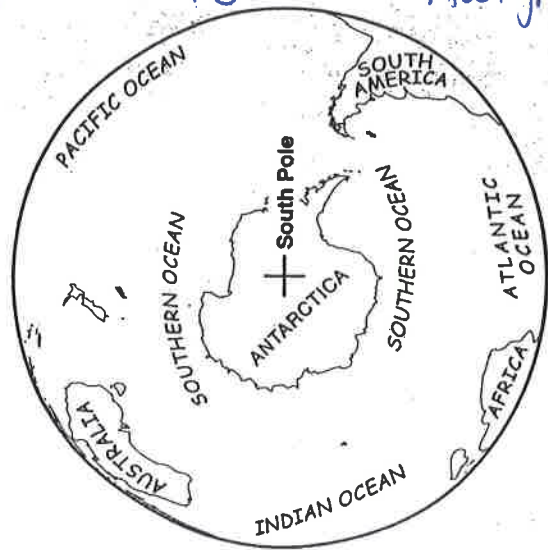
# The Four Hemispheres



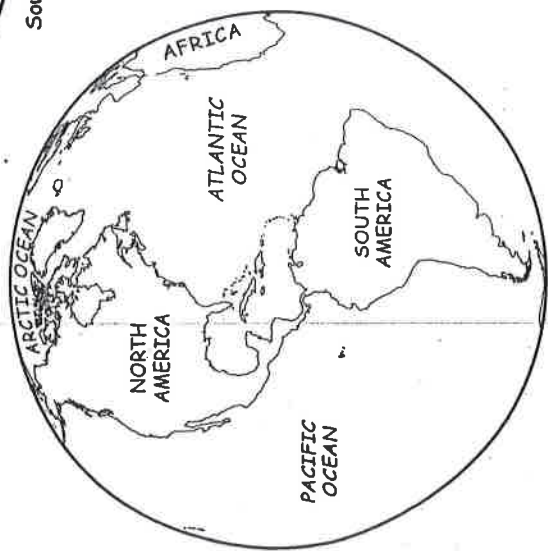
Northern Hemisphere



Southern Hemisphere



Eastern Hemisphere



Western Hemisphere

---



---



---



---

Name



# The Four Hemispheres

## Monday

1. The equator divides the Earth into which two hemispheres?

\_\_\_\_\_

2. The prime meridian helps to divide the Earth into which two hemispheres?

\_\_\_\_\_

## Tuesday

1. North America is part of which two hemispheres?

\_\_\_\_\_

2. Is Australia part of the Northern and Western Hemispheres, or the Southern and Eastern Hemispheres?

\_\_\_\_\_

## Wednesday

1. Asia is located in which directions from the equator and from the prime meridian? In which hemispheres is Asia located?

\_\_\_\_\_

\_\_\_\_\_

2. Does the equator cross the northern or southern part of South America? South America is located mostly in which two hemispheres?

\_\_\_\_\_

\_\_\_\_\_



# The Four Hemispheres

## Thursday

1. In which hemisphere is the North Pole located? Which ocean is closest to the North Pole?

---

---

2. What is the only hemisphere in which Antarctica has no land?

---

## Friday

1. Most geographers agree there are really five oceans. Name the five oceans. Which of the oceans is closest to Antarctica?

---

---

---

2. Africa has land in both the Eastern and the Western Hemispheres. Africa is considered part of the Eastern Hemisphere. Why?

---

---

## Challenge

Write a caption on the map, explaining which continents are considered part of the Eastern Hemisphere and which continents are considered part of the Western Hemisphere.